







Count the letters and symbols on each of the hearts below. You can use the totals to make addition problems, then try to solve each problem.

				
<b>5</b>	<b>+</b>	<b>7</b>	<b>=</b>	<b>12</b>
				
<b>7</b>	<b>+</b>	<b>8</b>	<b>=</b>	<b>?</b>
				
<b>?</b>	<b>+</b>	<b>?</b>	<b>=</b>	<b>?</b>

Answers:  $7 + 8 = 15$ ,  $5 + 4 = 9$

You can do it up and down, too!

$$\begin{array}{r} 1 \\ + 4 \\ \hline 5 \end{array}$$



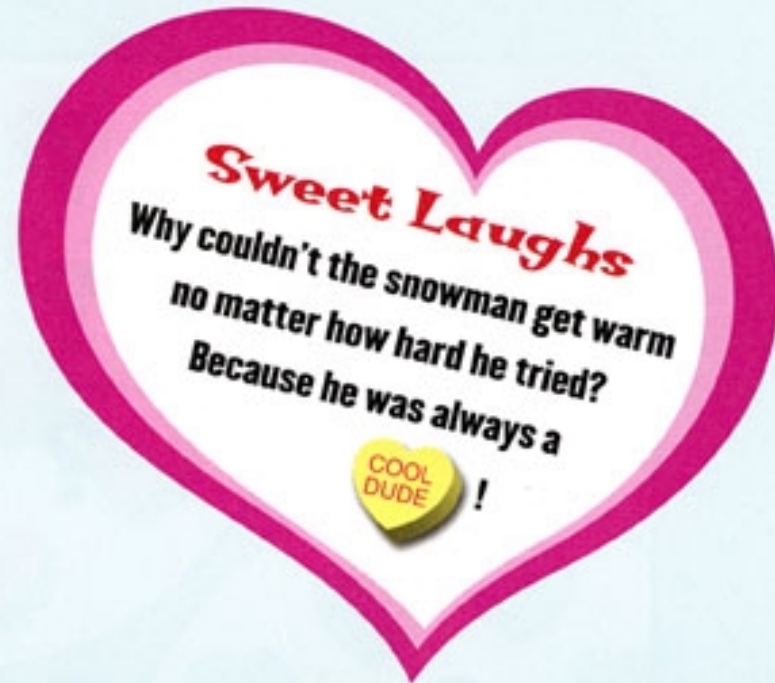
$$\begin{array}{r} 8 \\ + 6 \\ \hline 14 \end{array}$$



$$\begin{array}{r} ? \\ + ? \\ \hline ? \end{array}$$



$$\begin{array}{r} ? \\ + ? \\ \hline ? \end{array}$$



Answers:  $8 + 6 = 14$ ,  $5 + 7 = 12$